

# Combined Higher Secondary Level (10+2) Examination-2018

Roll No.	
Registration No.	
Name	
Test Venue	iON Digital Zone iDZ Naino Ka Bas
Test Time	4:00 PM - 5:00 PM
Test Date	05/07/2019

## Section : General Intelligence

Q.1 Select the combination of letters that when sequentially placed in the gaps of the given letter series will complete the series.

x q \_ \_ m c c \_ \_ q p f m \_ \_ b x \_ \_ f m c \_ b

- Ans
- 1. pfbxccqpc
  - 2. sfbcccqpc
  - 3. qfbxccqpc
  - 4. pfbxcxqpc

Question ID : 98958016811  
Status : Not Answered  
Chosen Option : --

Q.2 Select the number-pair in which the two numbers are related in the same way as are the two numbers of the following number-pair.

2 : 8

- Ans
- 1. 8 : 502
  - 2. 7 : 343
  - 3. 11 : 1321
  - 4. 9 : 629

Question ID : 98958016819  
Status : Answered  
Chosen Option : 2

Q.3 Three persons A, B and C have different amounts of rupees with them. If A takes ₹12 from C, A will have equal amount as B has. A and B together have total ₹102. How many rupees does A have?

- Ans
- 1. 50
  - 2. 55
  - 3. 57
  - 4. 45

Question ID : 98958016817  
Status : Answered  
Chosen Option : 4

Q.4 In a code language, PROMOTE is written as QTROGVQ. How will LICENSE be written as in that language?

- Ans
- 1. EKNGPUG
  - 2. EKNGGUP
  - 3. EKMHHUP
  - 4. NKEGGUP

Question ID : 98958016807  
Status : Not Answered  
Chosen Option : --

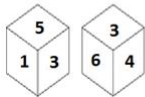
Q.5 Which number will replace the question mark (?) in the following series?

28, 32, 41, 57, 82, ?

- Ans
- 1. 120
  - 2. 118
  - 3. 116
  - 4. 122

Question ID : 98958016822  
Status : Answered  
Chosen Option : 2

Q.6 Two different positions of the same dice are shown below, the six faces of which are numbered 1 to 6. Find the number opposite to the face having 3.



- Ans
- 1. 2
  - 2. 6
  - 3. 4
  - 4. 1

Question ID : 98958016824  
Status : Answered  
Chosen Option : 1

Q.7 Select the set in which the numbers are related in the same way as are the numbers of the following set.

(4, 9, 16)

- Ans
- 1. (25, 36, 64)
  - 2. (16, 36, 49)
  - 3. (36, 81, 100)
  - 4. (49, 64, 81)

Question ID : 98958016820  
Status : Answered  
Chosen Option : 4

Q.8 Select the correct mirror image of the given figure when the mirror is placed to the right of the figure.

4 R F 8 9 3 Z f k 2

Ans

- 1. 4 R F 8 a 3 Z f k 2
- 2. 4 R F 8 a 3 Z f k 5
- 3. 4 R F 8 9 3 Z f k 5
- 4. 4 R F 8 a 3 Z f k 5

Question ID : 98958016829

Status : Answered

Chosen Option : 2

Q.9 Three of the following four letter-clusters are alike in a certain way and one is different. Pick the odd one out.

Ans

- 1. IMQU
- 2. AFIM
- 3. UYCG
- 4. SWAE

Question ID : 98958016814

Status : Answered

Chosen Option : 2

Q.10 Three of the following four numbers are alike in a certain way and one is different. Pick the number that is different from the rest.

Ans

- 1. 127
- 2. 118
- 3. 130
- 4. 129

Question ID : 98958016823

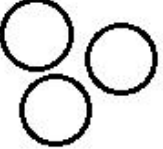
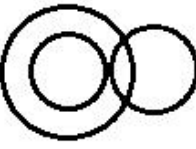

Status : Answered

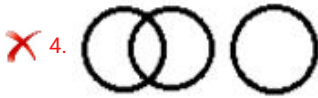
Chosen Option : 4

Q.11 Select the Venn diagram that best illustrates the relationship between the following classes.

Metal, Iron, Mercury

Ans

- 1. 
- 2. 
- 3. 

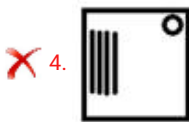
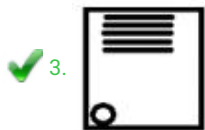
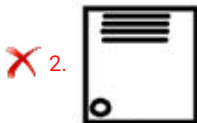
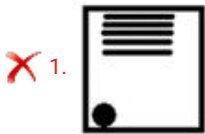


Question ID : 98958016830  
Status : Answered  
Chosen Option : 3

Q.12 Select the figure that will come next in the following figure series.



Ans



Question ID : 98958016825  
Status : Answered  
Chosen Option : 3

Q.13 Select the option that is related to the third letter-cluster in the same way as the second letter-cluster is related to the first letter-cluster.

GSDL : JPGI :: UCWF : ?

- Ans
- ✓ 1. XZZC
  - ✗ 2. XYXC
  - ✗ 3. YZZD
  - ✗ 4. WZZB

Question ID : 98958016809  
Status : Answered  
Chosen Option : 1

Q.14 A + B means 'A is son of B'  
A - B means 'A is husband of B'  
A × B means 'A is sister of B'  
A ÷ B means 'A is daughter of B'

If  $F \times R \times S \div G - P \div X$ , then how is X related to R?

- Ans
- ✗ 1. Paternal grandfather or paternal grandmother

2. Maternal grandfather or maternal grandmother

3. Father or mother

4. Grandson or granddaughter

Question ID : 98958016812

Status : Answered

Chosen Option : 2

Q.15 Which two signs should be interchanged in the following equation to make it correct?

$$211 \times 14 + 627 \div 33 - 17 = 520$$

Ans  1. + and -

2.  $\div$  and  $\times$

3. + and  $\div$

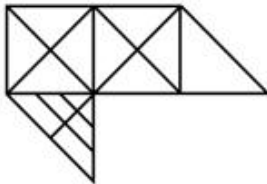
4.  $\times$  and -

Question ID : 98958016818

Status : Answered

Chosen Option : 4

Q.16 How many triangles are present in the given figure?



Ans  1. 29

2. 31

3. 30

4. 32

Question ID : 98958016826

Status : Answered

Chosen Option : 4

Q.17 If LUCRATIVE is coded as 333912945, then how will AMSTERDAM be coded as?

Ans  1. 141248414

2. 141259414

3. 149248414

4. 131458311

Question ID : 98958016808

Status : Answered

Chosen Option : 2

Q.18 Two statements are given, followed by three conclusions numbered I, II and III. Assuming the statements to be true, even if they seem to be at variance with commonly known facts, decide which of the conclusions logically follow(s) from the statements.

Statements:

All ice creams are juices.  
No juice is chocolate.

Conclusions:

- I. Some chocolates are ice-creams.
- II. Some juices are ice-creams.
- III. No ice-cream is chocolate.

- Ans
- 1. Only conclusions I and II follow.
  - 2. Either conclusion I or III follows.
  - 3. Only conclusions II and III follow.
  - 4. Only conclusions I and III follow.

Question ID : 98958016816  
Status : Answered  
Chosen Option : 3

Q.19 Select the word-pair in which the two words are related in the same way as are the two words in the following word-pair.

Architect : House map

- Ans
- 1. Carpenter : Furniture
  - 2. Lawyer : Court
  - 3. Doctor : Hospital
  - 4. Teacher : Writer

Question ID : 98958016813  
Status : Answered  
Chosen Option : 1

Q.20 'Disease' is related to 'Diabetes' in the same way as 'Vehicle' is related to '\_\_\_\_\_'.

- Ans
- 1. Driver
  - 2. Fuel
  - 3. Car
  - 4. Chassis

Question ID : 98958016810  
Status : Answered  
Chosen Option : 3

Q.21 Three of the following four words are alike in a certain way and one is different. Pick the odd word out.

- Ans
- 1. Circle
  - 2. Triangle
  - 3. Diagram
  - 4. Rectangle

Question ID : 98958016815  
Status : Answered  
Chosen Option : 3

Q.22 Select the set in which the numbers are related in the same way as are the numbers of the following set.

(88, 56, 72)

- Ans  1. (62, 48, 52)  
 2. (34, 28, 21)  
 3. (18, 24, 28)  
 4. (66, 48, 57)

Question ID : 98958016821  
 Status : Answered  
 Chosen Option : 4

Q.23 Arrange the following activities in a logical and meaningful order.

1. Television audio defect
2. Restart enjoying
3. Contact mechanic
4. Television repair done
5. Switch on television

- Ans  1. 5, 1, 4, 2, 3  
 2. 5, 1, 3, 4, 2  
 3. 4, 5, 1, 3, 2  
 4. 3, 5, 1, 2, 4

Question ID : 98958016806  
 Status : Answered  
 Chosen Option : 2

Q.24 Select the option in which Figure-X is embedded. (Rotation is not allowed)

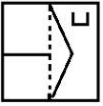


Figure-X

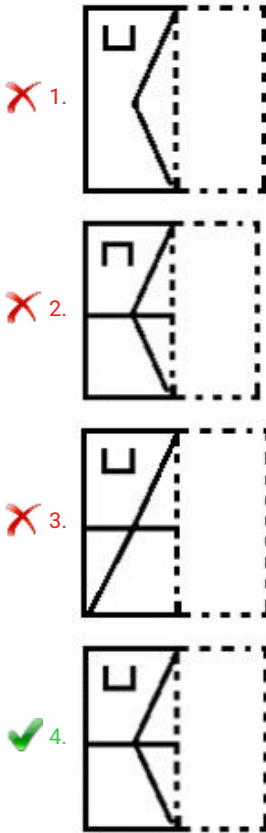
- Ans  1.   
 2.   
 3.   
 4.

Question ID : 98958016827  
 Status : Answered

**Q.25** A figure of transparent sheet with a pattern is given below. Select the option that shows how the pattern would appear when the transparent sheet is folded at the dotted line.



Ans



Question ID : 98958016828

Status : Answered

Chosen Option : 4

Section : General Awareness

**Q.1** Light rays enter the eye through the outer, transparent structure at the front of the eye called the \_\_\_\_\_.

- Ans
- 1. Lens
  - 2. Iris
  - 3. Cornea
  - 4. Optic nerve

Question ID : 98958016484

Status : Answered

Chosen Option : 2

**Q.2** Konark Temple in Odisha was built by which of the following kings?

- Ans
- 1. Bhanu Deva
  - 2. Anantavarman Chodagangadeva
  - 3. Narasimha Deva I



 4. Ananga Bhima Deva

Question ID : 98958016493  
Status : Answered  
Chosen Option : 3

Q.3 \_\_\_\_\_ is the primary acid present in ripe bananas.

- Ans  1. Formic Acid  
 2. Sulphuric Acid  
 3. Malic Acid  
 4. Hydrochloric Acid

Question ID : 98958016483  
Status : Answered  
Chosen Option : 3

Q.4 Which one of the following caves is situated in Maharashtra?

- Ans  1. Badami  
 2. Amarnath  
 3. Ellora  
 4. Borra

Question ID : 98958016491  
Status : Answered  
Chosen Option : 3

Q.5 In May 2019, Bengaluru-based medical doctor \_\_\_\_\_ was honoured with the 'Global Asian of the Year Award 2018-2019' for her contributions to the ecosystem and women healthcare.

- Ans  1. Hema Divakar  
 2. Shashi Wadhwa  
 3. Indira Hinduja  
 4. Neelam Kler

Question ID : 98958016502  
Status : Not Answered  
Chosen Option : --

Q.6 Who is the author of the book 'Changing India'?

- Ans  1. Narendra Modi  
 2. Shashi Tharoor  
 3. A P J Abdul Kalam  
 4. Manmohan Singh

Question ID : 98958016494  
Status : Answered  
Chosen Option : 2

Q.7 In 2019 who became the first Indian to win an election in Japan?

- Ans  1. Charandeep Singh

2. Yogendra Puranik

3. Kishore Kafley

4. Piyush Jindal

Question ID : 98958016501  
Status : Not Answered  
Chosen Option : --

Q.8 Who developed the operating system Linux started as a project by a student of Finland?

Ans  1. Barbara Liskov

2. Linus Torvalds

3. Leonard M. Adleman

4. Leslie Lamport

Question ID : 98958016486  
Status : Not Answered  
Chosen Option : --

Q.9 Which of the following is waterfall is created by river Sharavathi the highest waterfall in India?

Ans  1. Dhuandhar Falls

2. Athirappilly Falls

3. Jog Falls

4. Dudhsagar Falls

Question ID : 98958016489  
Status : Answered  
Chosen Option : 3

Q.10 Who won the American Reality Show, 'The World's Best' 2019 for displaying his talent as a pianist?

Ans  1. Lydian Nadhaswaram

2. Stephen Devassy

3. Utsav Lal

4. Anil Srinivasan

Question ID : 98958016495  
Status : Not Answered  
Chosen Option : --

Q.11 Who presides over the joint sitting of the two Houses of Parliament?

Ans  1. Prime Minister

2. The Speaker of the Lok Sabha

3. The Vice President

4. President

Question ID : 98958016497  
Status : Answered  
Chosen Option : 2

Q.12 In 1991, India's first indigenous supercomputer named \_\_\_\_\_ was developed by Vijay Bhatkar.

- Ans
- 1. Prayas 3000
  - 2. Prayog 2000
  - 3. Param 8000
  - 4. Pragati 5000

Question ID : 98958016487  
Status : Answered  
Chosen Option : 3

Q.13 The quorum to constitute a sitting of the Lok Sabha is \_\_\_\_\_ of the total number of Members of the House under article 100(3) of the Constitution of India.

- Ans
- 1. one-tenth
  - 2. one-fifth
  - 3. one-third
  - 4. half

Question ID : 98958016496  
Status : Answered  
Chosen Option : 1

Q.14 Paithani Saree belongs to the state of \_\_\_\_\_.

- Ans
- 1. Maharashtra
  - 2. Karnataka
  - 3. Tamil Nadu
  - 4. Kerala

Question ID : 98958016480  
Status : Not Answered  
Chosen Option : --

Q.15 What is the present Statutory Liquidity Ratio (SLR) announced by the Reserve Bank of India with effect from 1st January 2019?

- Ans
- 1. 19.00 per cent
  - 2. 19.50 per cent
  - 3. 19.25 per cent
  - 4. 19.75 per cent

Question ID : 98958016481  
Status : Not Answered  
Chosen Option : --

Q.16 Which of the following lakes is the largest man-made lake in India?

- Ans
- 1. Maharana Pratap Sagar
  - 2. Govind Vallabh Pant Sagar
  - 3. Rajsamand Lake
  - 4. Dhebar Lake

Question ID : 98958016488  
Status : Not Answered  
Chosen Option : --

Q.17 With which of the following sports is the term 'Jab' associated?

- Ans
- 1. Cricket
  - 2. Boxing
  - 3. Billiards
  - 4. Basketball

Question ID : 98958016498  
Status : Not Answered  
Chosen Option : --

Q.18 Which of the following is a Floating National Park of India?

- Ans
- 1. Namdapha
  - 2. Similipal
  - 3. Eravikulam
  - 4. Keibul Lamjao

Question ID : 98958016490  
Status : Not Answered  
Chosen Option : --

Q.19 Alexander invaded India in \_\_\_\_\_.

- Ans
- 1. 467 BC
  - 2. 323 BC
  - 3. 454 BC
  - 4. 326 BC

Question ID : 98958016492  
Status : Not Answered  
Chosen Option : --

Q.20 Somatotropin' is another name for \_\_\_\_\_.

- Ans
- 1. Digestive juice
  - 2. Laughing gas
  - 3. Tear gas
  - 4. Growth hormone

Question ID : 98958016485  
Status : Not Answered  
Chosen Option : --

Q.21 \_\_\_\_\_ from India won the girls' title at the IBSF World Under-16 Snooker Championships held in 2018.

- Ans
- 1. Varsha Sanjeev
  - 2. Keerthana Pandian
  - 3. Vidya Pillai

 4. Arantxa Sanchis

Question ID : 98958016500  
Status : Not Answered  
Chosen Option : --

Q.22 Which one of the following cyclones hit India in the month of May 2019?

- Ans
-  1. Cyclone Gaja
  -  2. Cyclone Nargis
  -  3. Cyclone Hudhud
  -  4. Cyclone Fani

Question ID : 98958016503  
Status : Answered  
Chosen Option : 4

Q.23 Devotional folk songs called 'Zikir' belong to the Indian state of:

- Ans
-  1. West Bengal
  -  2. Assam
  -  3. Uttar Pradesh
  -  4. Odisha

Question ID : 98958016479  
Status : Not Answered  
Chosen Option : --

Q.24 With which sport is the Indian player Neeraj Chopra associated?

- Ans
-  1. Boxing
  -  2. Swimming
  -  3. Javelin Throw
  -  4. Billiards

Question ID : 98958016499  
Status : Not Answered  
Chosen Option : --

Q.25 What is the amount of minimum assured monthly pension payable under the Pradhan Mantri Shram Yogi Maan-dhan (PM-SYM) scheme of the Government of India?

- Ans
-  1. ₹ 2000
  -  2. ₹ 1000
  -  3. ₹ 4000
  -  4. ₹ 3000

Question ID : 98958016482  
Status : Not Answered  
Chosen Option : --

Section : Quantitative Aptitude

Q.1

If  $(x + 7)^3 + (2x + 8)^3 + (2x + 3)^3 = 3(x + 7)(2x + 8)(2x + 3)$ , then what is the value of  $x$ ?

- Ans  1. -3.6  
 2. 3.6  
 3. 2.4  
 4. -2.4

Question ID : 98958017194  
Status : Answered  
Chosen Option : 1

Q.2 If  $3\sqrt[3]{x} + 4\sqrt[3]{x} = 5\sqrt[3]{x}$  then the value of  $x$  is:

- Ans  1. 8  
 2. 2  
 3. 4  
 4. 1

Question ID : 98958017192  
Status : Answered  
Chosen Option : 1

Q.3 If  $6(\sec^2 59^\circ - \cot^2 31^\circ) - \frac{2}{3} \sin 90^\circ - 3 \tan^2 56^\circ y \tan^2 34^\circ = \frac{y}{3}$ , then the value of  $y$  is:

- Ans  1.  $\frac{8}{5}$   
 2.  $-\frac{8}{5}$   
 3.  $\frac{2}{3}$   
 4.  $-\frac{2}{3}$

Question ID : 98958017199  
Status : Answered  
Chosen Option : 1

Q.4 If  $x = 2 - \sqrt{3}$  then the value of  $x^3 - x^{-3}$  is:

- Ans  1.  $-30\sqrt{3}$   
 2.  $30\sqrt{3}$   
 3.  $-30\sqrt{2}$   
 4.  $30\sqrt{2}$

Question ID : 98958017193  
Status : Answered  
Chosen Option : 1

Q.5

In a  $\triangle ABC$ , the bisectors of  $\angle B$  and  $\angle C$  meet at point  $O$  within the triangle. If  $\angle A = 132^\circ$ , then the measure of  $\angle BOC$  is:

- Ans
- 1.  $66^\circ$
  - 2.  $84^\circ$
  - 3.  $132^\circ$
  - 4.  $156^\circ$

Question ID : 98958017197

Status : Answered

Chosen Option : 4

Q.6 If  $\sec \theta = 3x$  and  $\tan \theta = \frac{3}{x}$ , ( $x \neq 0$ ) then the value of  $9\left(x^2 - \frac{1}{x^2}\right)$  is:

- Ans
- 1.  $\frac{1}{2}$
  - 2.  $\frac{1}{3}$
  - 3. 1
  - 4.  $\frac{1}{4}$

Question ID : 98958017200

Status : Answered

Chosen Option : 3

Q.7 A circle is inscribed in a triangle  $ABC$ . It touches sides  $AB$ ,  $BC$  and  $AC$  at the points  $P$ ,  $Q$  and  $R$  respectively. If  $BP = 5.4$  cm,  $CQ = 7.3$  cm and  $AR = 6.1$  cm, then the perimeter (in cm) of the  $\triangle ABC$  is:

- Ans
- 1. 37.25
  - 2. 37.6
  - 3. 36
  - 4. 37

Question ID : 98958017195

Status : Answered

Chosen Option : 2

Q.8 The average age of four brothers is 14 years. If their father is also included, the average is increased by 4 years. The age of the father (in years) is:

- Ans
- 1. 36
  - 2. 34
  - 3. 40
  - 4. 38

Question ID : 98958017184

Status : Answered

Chosen Option : 2

Q.9 If  $\cos x = \frac{-1}{2}$  and  $\pi < x < \frac{3\pi}{2}$ , then the value of  $2\tan^2 x + 3\operatorname{cosec}^2 x$  is:

- Ans
- 1. 4
  - 2. 10

3. 8

4. 16

Question ID : 98958017201  
Status : Answered  
Chosen Option : 2

**Q.10** Two students, A and B, appeared for an examination. A secured 8 marks more than B and the marks of the former was 55% of the sum of their marks. The marks obtained by A and B, respectively, are:

**Ans**  1. 44, 36

2. 36, 28

3. 38, 30

4. 40, 32

Question ID : 98958017187  
Status : Answered  
Chosen Option : 4

**Q.11** If  $x\%$  of  $y$  is 150 and  $y\%$  of  $z$  is 300, then the relation between  $x$  and  $z$  is:

**Ans**  1.  $z = x$

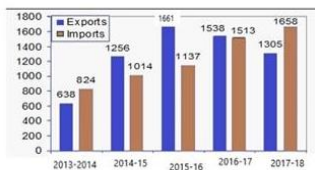
2.  $z = x/3$

3.  $z = x/2$

4.  $z = 2x$

Question ID : 98958017186  
Status : Answered  
Chosen Option : 4

**Q.12** The given Bar Graph presents the Imports and Exports of an item (in tonnes) manufactured by a company for the five financial years, 2013-2014 to 2017-2018.



In which financial year, the absolute difference of the Exports to those of Imports is the lowest?

**Ans**  1. 2016-2017

2. 2015-2016

3. 2014-2015

4. 2013-2014

Question ID : 98958017202  
Status : Answered  
Chosen Option : 1

**Q.13** A person purchased a vehicle for ₹4,90,828 and sold it for ₹5,52,920. What is the percent profit earned on this vehicle (correct to two decimal places)?

**Ans**  1. 15.51%



2. 11.55%

3. 19.55%

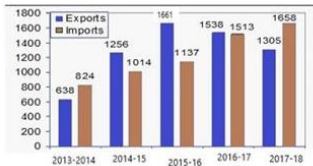
4. 12.65%

Question ID : 98958017189

Status : Answered

Chosen Option : 4

**Q.14** The given Bar Graph presents the Imports and Exports of an item (in tonnes) manufactured by a company for the five financial years, 2013-2014 to 2017-2018.



What is the ratio of total Imports to total Exports during 2014-2015, 2015-2016 and 2016-2017?

**Ans**  1. 4175 : 4011

2. 3664 : 4455

3.

4. 4011 : 4175

Question ID : 98958017203

Status : Answered

Chosen Option : 2

**Q.15** A, B and C can complete a piece of work in 4, 20 and 60 days respectively. Working together, they can complete the one third of the same work in how many days?

**Ans**  1.  $1\frac{3}{19}$

2.  $1\frac{1}{19}$

3.  $\frac{3}{19}$

4.  $2\frac{1}{19}$

Question ID : 98958017181

Status : Answered

Chosen Option : 2

**Q.16** The chord of the contact of tangents drawn from a point on the circle  $x^2 + y^2 = a^2$  to the circle  $x^2 + y^2 = b^2$  touches the circle  $x^2 + y^2 = c^2$  such that  $b^p = a^m c^n$ , where  $m, n, p \in \mathbb{N}$ , and  $m, n, p$  are prime to each other, then the value of  $m + n + p + 3$  is:

**Ans**  1. 6

2. 5

3. 2

4. 7

Question ID : 98958017196

Status : Not Answered

Chosen Option : --

**Q.17** There was 25% off on shirt. A lady bought a shirt and got an additional 20% discount for paying in cash and further 10% discount for being a loyal customer. She paid ₹405. What was the price tag (in ₹) on the shirt?

- Ans
- 1. 650
  - 2. 600
  - 3. 750
  - 4. 725

Question ID : 98958017185  
Status : Answered  
Chosen Option : 3


**Q.18** Two numbers are in the ratio of 7 : 5. On diminishing each of them by 40, the ratio becomes 27 : 17. The sum of the numbers is:

- Ans
- 1. 300
  - 2. 240
  - 3. 325
  - 4. 275

Question ID : 98958017188  
Status : Answered  
Chosen Option : 1

**Q.19** The simplified value of

$$\frac{\left(3\frac{1}{5} + \frac{3}{5}\right) \div \frac{8}{5}}{1\frac{1}{7} \div \left\{\frac{6}{7} - \left(\frac{1}{7} \div \frac{1}{5}\right)\right\}}$$
 is:

- Ans
- 1.  $\frac{19}{7}$
  - 2.  $\frac{19}{8}$
  - 3.  $\frac{19}{16}$
  - 4. 

Question ID : 98958017191  
Status : Answered  
Chosen Option : 4

**Q.20** In triangle ABC, the length of BC is less than twice the length of AB by 3 cm. The length of AC exceeds the length of AB by 9 cm. The perimeter of triangle is 34 cm. The length (in cm) of the smallest side of the triangle is:

- Ans
- 1. 10
  - 2. 9
  - 3. 7
  - 4. 8

Question ID : 98958017198  
Status : Answered  
Chosen Option : 3

**Q.21** The ratio between the speeds of two trains is 5 : 7. If the first train covers 300 km in 3 hours, then the speed (in km/h) of the first train is:

- Ans**
- 1. 150
  - 2. 140
  - 3. 100
  - 4. 120

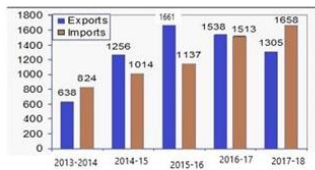
Question ID : **98958017182**  
Status : **Answered**  
Chosen Option : **3**

**Q.22** If a 10-digit number  $1230x558y2$  is divisible by 88, then the value of  $(5x + 5y)$  is:

- Ans**
- 1. 20
  - 2. 40
  - 3. 30
  - 4. 50

Question ID : **98958017190**  
Status : **Answered**  
Chosen Option : **2**

**Q.23** The given Bar Graph presents the Imports and Exports of an item (in tonnes) manufactured by a company for the five financial years, 2013-2014 to 2017-2018.



What is the average of absolute difference between Exports and Imports (in tonnes) during the five financial years?

- Ans**
- 1. 266
  - 2. 260
  - 3. 264
  - 4. 256

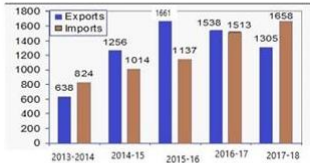
Question ID : **98958017204**  
Status : **Not Answered**  
Chosen Option : **--**

**Q.24** The ratio of the areas of two triangles ABC and PQR is 4 : 5 and the ratio of their heights is 5 : 3. The ratio of the bases of triangle ABC to that of triangle PQR is:

- Ans**
- 1. 12 : 25
  - 2. 11 : 15
  - 3. 15 : 11
  - 4. 25 : 12

Question ID : **98958017183**  
Status : **Answered**  
Chosen Option : **1**

**Q.25** The given Bar Graph presents the Imports and Exports of an item (in tonnes) manufactured by a company for the five financial years, 2013-2014 to 2017-2018.



In which financial year the percentage increase in Imports and Exports taken together is the lowest in comparison to its previous financial year?

- Ans**
- 1. 2015-2016
  - 2. 2014-2015
  - 3. 2016-2017
  - 4. 2017-2018

Question ID : 98958017205  
Status : Answered  
Chosen Option : 4

Section : English Language

**Q.1** Select the correctly spelt word.

- Ans**
- 1. gaiety
  - 2. gaity
  - 3. gaeity
  - 4. gayety

Question ID : 98958016138  
Status : Answered  
Chosen Option : 1

**Q.2** Select the most appropriate word for the group of words.

One who is indifferent to pleasure or pain

- Ans**
- 1. wise
  - 2. brave
  - 3. stoic
  - 4. temperate

Question ID : 98958016136  
Status : Answered  
Chosen Option : 3

**Q.3** Select the most appropriate synonym of the given word.

**REPRIMAND**

- Ans**
- 1. reproach
  - 2. reward
  - 3. eradicate
  - 4. applaud

Question ID : 98958016131

Status : **Answered**  
Chosen Option : 1

Q.4 Given below are four jumbled sentences. Out of the given options pick the one that gives their correct order.

- A. They used thin twigs called chew sticks as tooth cleaners.
- B. The fuzzy end was rubbed against the teeth to keep them clean.
- C. These sticks were fuzzy at one end.
- D. How did people clean their teeth before the toothbrush was invented?

- Ans
- 1. DBCA
  - 2. ACBD
  - 3. DACB
  - 4. BCAD

Question ID : 98958016128  
Status : **Answered**  
Chosen Option : 3

Q.5 Identify the segment which contains the grammatical error.

It was a windy autumn day and leaves were fallen rapidly from the trees.

- Ans
- 1. It was a
  - 2. leaves were fallen
  - 3. windy autumn day
  - 4. rapidly from trees

Question ID : 98958016116  
Status : **Answered**  
Chosen Option : 2

Q.6 Select the most appropriate indirect form of the given sentence.

My grandmother said, "I bore six children."

- Ans
- 1. My grandmother told that she had bore six children.
  - 2. My grandmother said that she had borne six children.
  - 3. My grandmother said that she has born six children.
  - 4. My grandmother said she bore six children.

Question ID : 98958016119  
Status : **Answered**  
Chosen Option : 2

Q.7 Select the most appropriate word for the group of words.

A previous case that might serve as an example or guide in subsequent situations

- Ans
- 1. precedent
  - 2. predecessor
  - 3. president
  - 4. precursor

Question ID : 98958016137  
Status : **Answered**

**Q.8** Identify the most appropriate option to substitute the underlined segment. If no substitution is required, select No substitution.

The shoebill stork can be recognise from its long legs and broad wings.

- Ans
- 1. recognise through it's
  - 2. recognising from it's
  - 3. recognised by its
  - 4. No substitution

Question ID : 98958016121  
Status : Answered  
Chosen Option : 3

**Q.9** Select the most appropriate meaning of the given idiom.

Have one's hands full

- Ans
- 1. to be very rich
  - 2. to be very clumsy
  - 3. to be very busy
  - 4. to be very generous

Question ID : 98958016134  
Status : Answered  
Chosen Option : 1

**Q.10** Select the most appropriate synonym of the given word.

SORDID

- Ans
- 1. dirty
  - 2. solid
  - 3. clean
  - 4. pure

Question ID : 98958016130  
Status : Answered  
Chosen Option : 1

**Q.11** Select the most appropriate antonym of the given word.

FEROCIOUS

- Ans
- 1. fierce
  - 2. prudent
  - 3. gentle
  - 4. cunning

Question ID : 98958016133  
Status : Answered  
Chosen Option : 3

In the following passage some words have been deleted. Fill in the blanks with the help of the alternatives given. Select the most appropriate option for each blank.

My grandmother is the genealogist of the family. She (1) \_\_\_\_\_ records of births, deaths, marriages and divorces. She takes the job (2) \_\_\_\_\_ seriously. She sends (3) \_\_\_\_\_ to the family whenever something noteworthy (4) \_\_\_\_\_. We recently had a bulletin about the (5) \_\_\_\_\_ of a relative who bequeathed his antique furniture to his descendants.

**SubQuestion No : 12**

**Q.12 Select the most appropriate option to fill in blank number 1**

- Ans
- 1. promotes
  - 2. produces
  - 3. spreads
  - 4. maintains

Question ID : 98958016123

Status : Answered

Chosen Option : 4

**Comprehension:**

In the following passage some words have been deleted. Fill in the blanks with the help of the alternatives given. Select the most appropriate option for each blank.

My grandmother is the genealogist of the family. She (1) \_\_\_\_\_ records of births, deaths, marriages and divorces. She takes the job (2) \_\_\_\_\_ seriously. She sends (3) \_\_\_\_\_ to the family whenever something noteworthy (4) \_\_\_\_\_. We recently had a bulletin about the (5) \_\_\_\_\_ of a relative who bequeathed his antique furniture to his descendants.

**SubQuestion No : 13**

**Q.13 Select the most appropriate option to fill in blank number 2**

- Ans
- 1. quick
  - 2. quit
  - 3. quiet
  - 4. quite

Question ID : 98958016124

Status : Answered

Chosen Option : 4

**Comprehension:**

In the following passage some words have been deleted. Fill in the blanks with the help of the alternatives given. Select the most appropriate option for each blank.

My grandmother is the genealogist of the family. She (1) \_\_\_\_\_ records of births, deaths, marriages and divorces. She takes the job (2) \_\_\_\_\_ seriously. She sends (3) \_\_\_\_\_ to the family whenever something noteworthy (4) \_\_\_\_\_. We recently had a bulletin about the (5) \_\_\_\_\_ of a relative who bequeathed his antique furniture to his descendants.

**SubQuestion No : 14**

**Q.14 Select the most appropriate option to fill in blank number 3**

- Ans
- 1. messages
  - 2. advertisements
  - 3. brochures
  - 4. notices

Question ID : 98958016125

Status : Answered

Chosen Option : 4

**Comprehension:**

In the following passage some words have been deleted. Fill in the blanks with the help of the alternatives given. Select the most appropriate option for each blank.

My grandmother is the genealogist of the family. She (1) \_\_\_\_\_ records of births, deaths, marriages and divorces. She takes the job (2) \_\_\_\_\_ seriously. She sends (3) \_\_\_\_\_ to the family whenever something noteworthy (4) \_\_\_\_\_. We recently had a bulletin about the (5) \_\_\_\_\_ of a relative who bequeathed his antique furniture to his descendants.

**SubQuestion No : 15**

**Q.15 Select the most appropriate option to fill in blank number 4**

- Ans
- 1. exists
  - 2. obtains
  - 3. passes
  - 4. occurs

Question ID : 98958016126

Status : Answered

Chosen Option : 4

**Comprehension:**

In the following passage some words have been deleted. Fill in the blanks with the help of the alternatives given. Select the most appropriate option for each blank.

My grandmother is the genealogist of the family. She (1) \_\_\_\_\_ records of births, deaths, marriages and divorces. She takes the job (2) \_\_\_\_\_ seriously. She sends (3) \_\_\_\_\_ to the family whenever something noteworthy (4) \_\_\_\_\_. We recently had a bulletin about the (5) \_\_\_\_\_ of a relative who bequeathed his antique furniture to his descendants.

**SubQuestion No : 16**

**Q.16 Select the most appropriate option to fill in blank number 5**

- Ans
- 1. demolition
  - 2. destruction
  - 3. demise
  - 4. damage

Question ID : 98958016127

Status : Answered

Chosen Option : 3

**Q.17 Select the wrongly spelt word.**

- Ans
- 1. accelarate
  - 2. accumulate
  - 3. accomplice
  - 4. accommodate

Question ID : 98958016139

Status : Answered

Chosen Option : 1

**Q.18 Select the most appropriate meaning of the given idiom.**

**Face the music**

- Ans
- 1. face the enemy
  - 2. enjoy the harmony



3. get appreciation

4. face the criticism

Question ID : 98958016135

Status : Answered

Chosen Option : 4

Q.19 Given below are four jumbled sentences. Out of the given options pick the one that gives their correct order.

- A. Her father had been stuck in an elevator for six hours.
- B. Esha had heard from her parents about a blackout caused by a sudden storm.
- C. She had to grope in the dark and cook by the candlelight.
- D. Her mother's story had been quite different from his.

Ans  1. CADB

2. BADC

3. BDCA

4. ADCB

Question ID : 98958016129

Status : Answered

Chosen Option : 2

Q.20 Identify the most appropriate option to substitute the underlined segment. If no substitution is required, select No substitution.

I have a terrible cold during several days now.

Ans  1. No substitution

2. had a terrible cold since

3. have had a terrible cold for

4. am having a terrible cold during

Question ID : 98958016120

Status : Answered

Chosen Option : 3

Q.21 Select the most appropriate passive form of the given sentence.

The store manager caught the teenager shoplifting.

Ans  1. The store manager is caught shoplifting by the teenager.

2. The teenager is caught shoplifting by the store manager.

3. The teenager has been caught shoplifting by the store manager.

4. The teenager was caught shoplifting by the store manager.

Question ID : 98958016118

Status : Answered

Chosen Option : 4

Q.22 Identify the segment which contains the grammatical error.

Each of the pictures have been signed by the football star.

Ans  1. have been

2. Each of

3. the pictures

4. signed by

Question ID : 98958016117  
Status : Answered  
Chosen Option : 1

Q.23 Fill in the blank with the most appropriate word.

The soldiers planned to attack at a precise hour so they \_\_\_\_\_ their watches.

- Ans
- 1. assessed
  - 2. exchanged
  - 3. restored
  - 4. synchronized

Question ID : 98958016141  
Status : Answered  
Chosen Option : 4

Q.24 Fill in the blank with the most appropriate word.

The entrepreneur is looking for an \_\_\_\_\_ to fund his project.

- Ans
- 1. invigilator
  - 2. investor
  - 3. aviator
  - 4. inspector

Question ID : 98958016140  
Status : Answered  
Chosen Option : 2

Q.25 Select the most appropriate antonym of the given word.

MISERY

- Ans
- 1. dearth
  - 2. poverty
  - 3. censure
  - 4. bliss

Question ID : 98958016132  
Status : Answered  
Chosen Option : 4